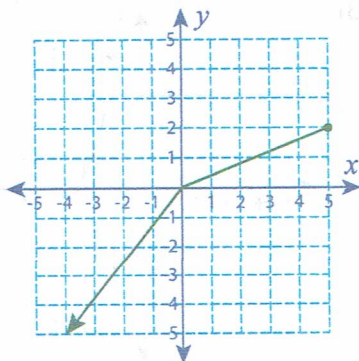


**Domain and Range**

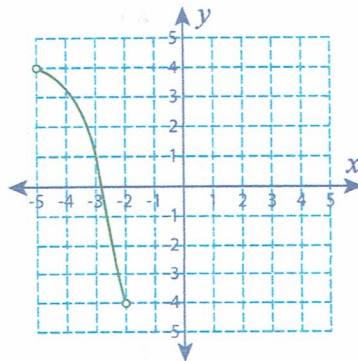
MS2

Find the domain and range for each graph.

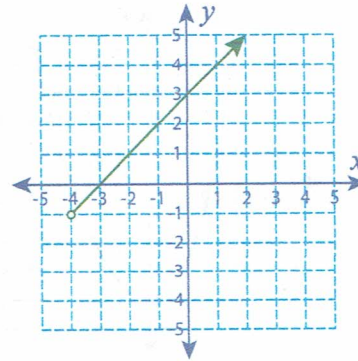
1)

Domain :  $x \leq 5$ Range :  $y \leq 2$ 

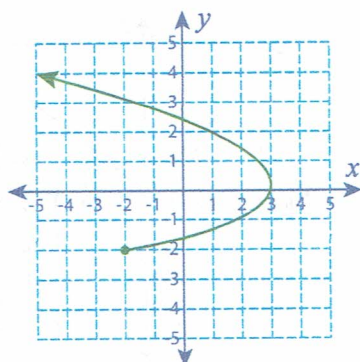
2)

Domain :  $-5 < x < -2$ Range :  $-4 < y < 4$ 

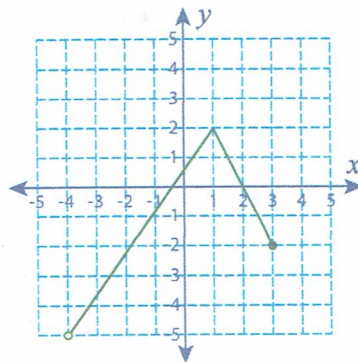
3)

Domain :  $x > -4$ Range :  $y > -1$ 

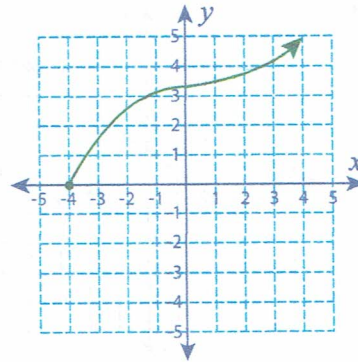
4)

Domain :  $x \leq 3$ Range :  $y \geq 2$ 

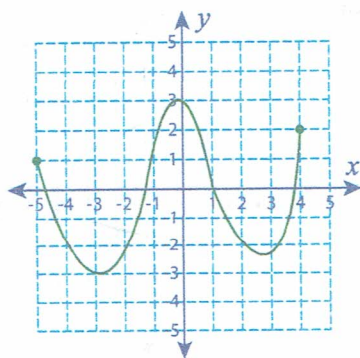
5)

Domain :  $-4 < x \leq 3$ Range :  $-5 < y \leq 2$ 

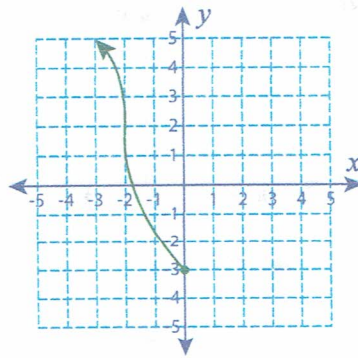
6)

Domain :  $x \geq -4$ Range :  $y \geq 0$ 

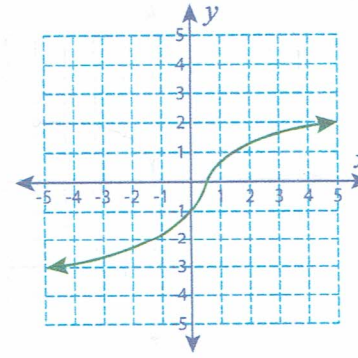
7)

Domain :  $-5 \leq x \leq 4$ Range :  $-3 \leq y \leq 3$ 

8)

Domain :  $x \leq 0$ Range :  $y \geq -3$ 

9)

Domain :  $x \in \mathbb{R}$ Range :  $y \in \mathbb{R}$